







Complete the column addition.

+

Hundreds	Tens	Ones
		
		

H	T	O						
			(+)			
			(+)	
			(+)

2

+

- a) Draw counters to complete the chart.

- b) Complete the column addition.

- c) Which column did you add first? Talk to a partner about your method.

H	T	O					
		(+)			
		(+)	
		(+)

5

a) Tick the additions with an answer that ends in zero.

317 + 203	<input type="text"/>
-----------	----------------------

192 + 784	
-----------	--

$390 + 177$	<input type="text"/>
-------------	----------------------

455 + 165	<input type="text"/>
-----------	----------------------

386 + 184	
-----------	--

319 + 501	<input type="text"/>
-----------	----------------------

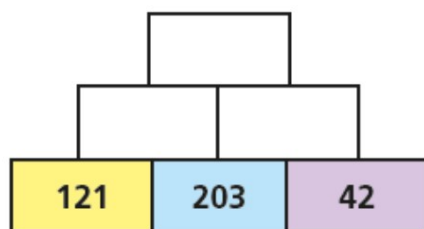
b) Did you have to work out all of the additions?

H	T	O						
			(+)			
			(+)	
			(+)

Here is an addition pyramid.

Add the two numbers below to make the number above.

a) Complete the addition pyramid.



H	T	O					
			(+)				
			(+))		
			(+)				

Explore

Add a **2-digit** number to **426** so **one** column changes.

Add a **2-digit** number to **426** so **two** columns change.

Add a **2-digit** number to **426** so **three** columns change.

H	T	O							
			(+)				
			(+)		
			(+)	

Explain your answer.

Plenary

Make the biggest number!

In pairs, roll a dice and think what column it should go in to make the biggest number. When all the columns are full, add them up to see who has won.

Ext: You can now choose to put your digit in your or your partner's column!

H	T	O						
			(+)			
			(+)	
			(+)

H	T	O					
			(+)		
			(+)
			(+)

H	T	O					
			(+)		
			(+)
			(+)

H	T	O					
		(+)					
		(+)					
		(+)					
		(+)					

[illegible]

H	T	O					
		(+)					
		(+)					
		(+)					

[illegible]

H	T	O						
		(+)						
		(+)						
		(+)						

H	T	O					
		(+)					
		(+)					
		(+)					

H	T	O					
		(+)					
		(+)					
		(+)					

[illegible]

H	T	O					
			(+)		
			(+)
			(+)

H	T	O					
			(+)		
			(+)
			(+)

[illegible]

[illegible]

[illegible]

H	T	O						
			(+)			
			(+)	
			(+)

[illegible]