

**I** Ron, Eva and Mo each have 23 marbles.

Tens	Ones
	
	
	

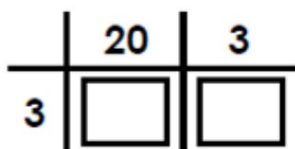
One toaster costs £32

How much do 3 toasters cost?

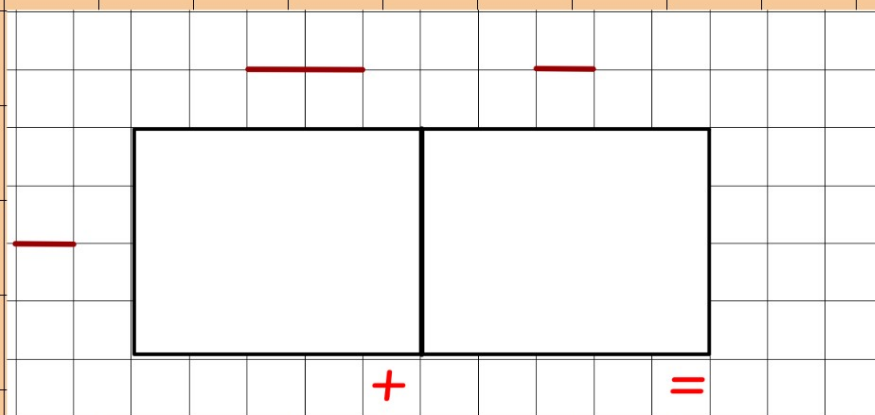


## Read the Pictures

Use the picture and the grid to answer  $23 \times 3$ :




$$23 \times 3 = \square$$



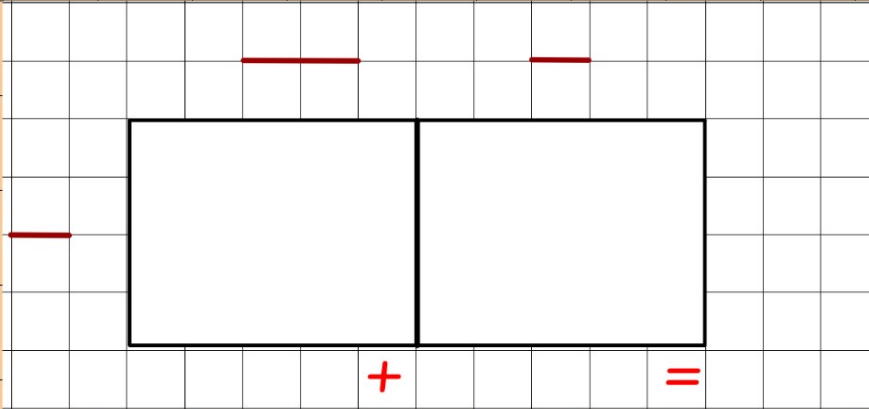
## Read the Pictures

Use the picture and the grid to answer  $24 \times 4$ :



	20	4
4	<input type="text"/>	<input type="text"/>

$$24 \times 4 = \boxed{\phantom{000}}$$



Whitney has multiplied a 2-digit number by a 1-digit number.



I had to do  
 $30 + 9 = 39$  to get  
my answer.

What numbers is Whitney multiplying?

Fill in the missing digits.

## Explain the Mistakes

### Mistake A:

**Mistake A:**

	40	2	24
			+ 12
6	24	12	<u>36</u>

Answer the question correctly

# Plenary

Make the biggest number!

In pairs, roll a dice and think where the digit should go to make the biggest number. When all the digits are in place, multiply them to see who has won.

Ext: You can now choose to put your digit in your  
or your partner's grid!