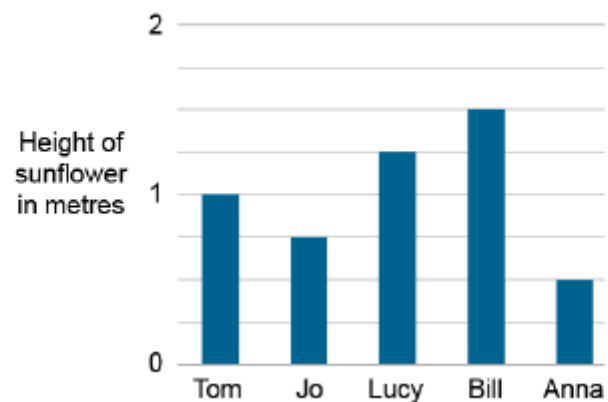
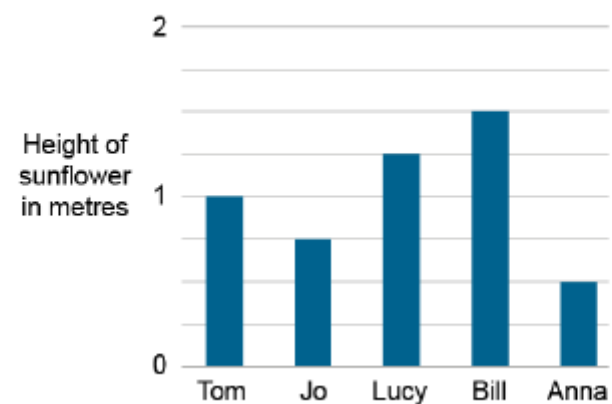


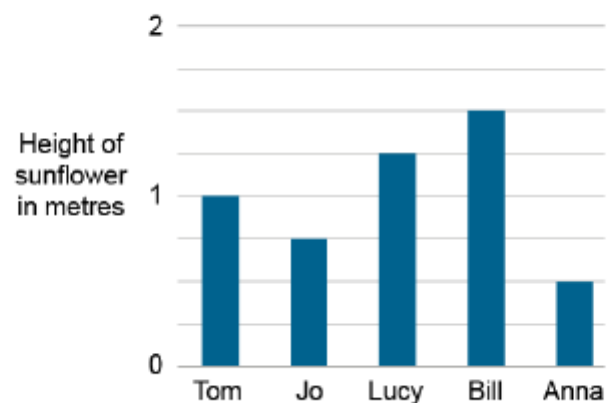
5 children have been growing sunflowers. The bar chart shows how tall each child's sunflower has grown. How tall is each flower?



5 children have been growing sunflowers. The bar chart shows how tall each child's sunflower has grown. How tall is each flower?



5 children have been growing sunflowers. The bar chart shows how tall each child's sunflower has grown. How tall is each flower?



5 children have been growing sunflowers. The bar chart shows how tall each child's sunflower has grown. How tall is each flower?

