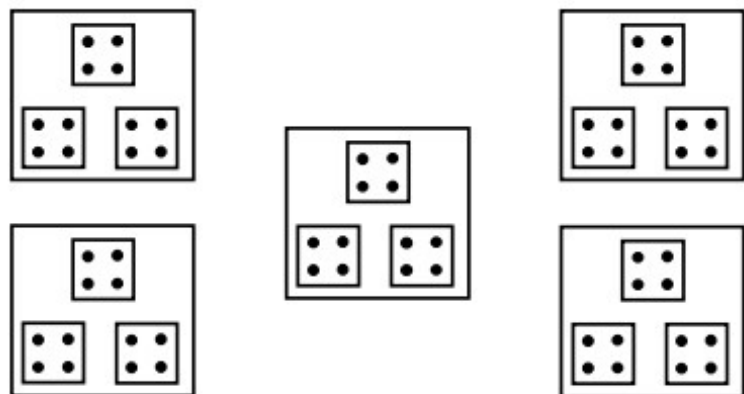


Read the picture


How many dots?



Which number sentence(s) do you see?

Read the picture

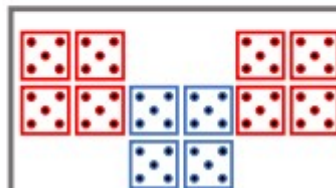
How many dots?



Write a multiplication number sentence for each example. One has been done for you.

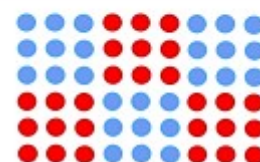
$$6 + 12 + 12$$

$$6 \times 5 = 30$$



$$5 \times 4 - 5$$

$$7 \times 4 + 7 + 7$$



$$4 + 8 + 12$$

I know... so...

$$6 \times \underline{\quad} = 48$$

$$6 \times 6 = 36$$

$$12 \times 6 = \underline{\quad}$$

36					
6	6	6	6	6	6