







There are 345 people at the football match. 134 leave at half time. How many people are left?

Mr. Jolley has 560 Bright Spark awards. He gives out 72. How many Bright Spark awards are left?

During spring 234 plants grow in the garden. In summer another 146 plants grow. How many plants are in the garden?



Read

Read the question.
What is the important information?

Understand

Understand the question.
What do you need to find out?

Choose

Choose the correct method of calculation and operation(s).

Solve

Solve the problem.
Make sure you follow the steps.

Answer

Answer the question.
What were you meant to find out?







Check

Check your answer.
Use the inverse to check your working out.

There are 345 people at the football match. 134 leave at half time. How many people are left?

Mr. Jolley has 560 Bright Spark awards. He gives out 72. How many Bright Spark awards are left?

During spring 234 plants grow in the garden. In summer another 146 plants grow. How many plants are in the garden?



Read

Read the question.
What is the important information?

Understand

Understand the question.
What do you need to find out?

Choose

Choose the correct method of calculation and operation(s).

Solve

Solve the problem.
Make sure you follow the steps.

Answer

Answer the question.
What were you meant to find out?

Check

Check your answer.
Use the inverse to check your working out.