

Main - Written Division

Using the facts we have worked on, we can solve written division questions using a number line.

I do $52 \div 4$ ① $52 \div 4 = 13$ Use a multiplication grid to help!

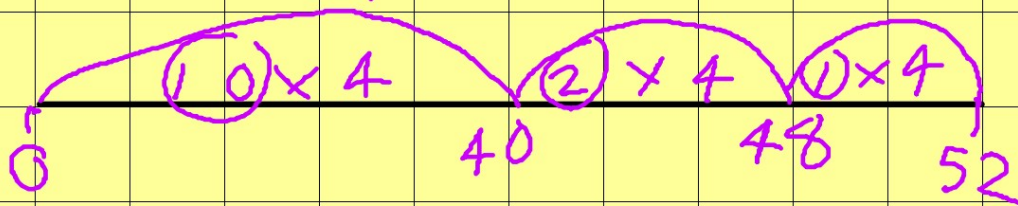
Key facts

$$10 \times 4 = 40$$

$$5 \times 4 = 20$$

$$2 \times 4 = 8$$

$$1 \times 4 = 4$$



$$10 + 2 + 1 = 13$$

Week 10 Day 1

Remember: Pencil, short date, underlined.

I do $48 \div 3$

Remember
Reasoning is
important -
challenge
yourselves!



Calculation at Chesswood

Division

2

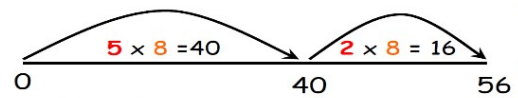
Number Line in chunks

What jumps of 8 can you make on the number line towards 56?
 $5 \times 8 = 40$ would be good!

Now a jump of $2 \times 8 = 16$ would take you to 56.

$56 \div 8 =$

Use a number line to do this.



Add 5 and 2 = 7.

$56 \div 8 = 7$



Year 3

Week 10 Day 1

Remember: Pencil, short date, underlined.

We do $54 \div 3$

Remember
Reasoning is
important -
challenge
yourselves!



Calculation at Chesswood

Division

2

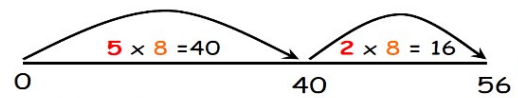
Number Line in chunks

What jumps of 8 can you make on the number line towards 56?
 $5 \times 8 = 40$ would be good!

Now a jump of $2 \times 8 = 16$ would take you to 56.

$56 \div 8 =$

Use a number line to do this.



Add 5 and 2 = 7.

$56 \div 8 = 7$



Year 3

Week 10 Day 1

Remember: Pencil, short date, underlined.

You do $63 \div 3$

Remember
Reasoning is
important -
challenge
yourselves!



Calculation at Chesswood

Division

2

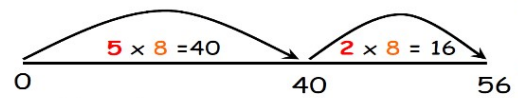
Number Line in chunks

What jumps of 8 can you make on the number line towards 56?
 $5 \times 8 = 40$ would be good!

Now a jump of $2 \times 8 = 16$ would take you to 56.

$56 \div 8 =$

Use a number line to do this.



Add 5 and 2 = 7.

$$56 \div 8 = 7$$

Year 3



Week 10 Day 2

Remember: Pencil, short date, underlined.

I do $69 \div 3$

Remember
Reasoning is
important -
challenge
yourselves!



Calculation at Chesswood

Division

2

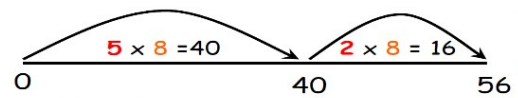
Number Line in chunks

What jumps of 8 can you make on the number line towards 56?
 $5 \times 8 = 40$ would be good!

Now a jump of $2 \times 8 = 16$ would take you to 56.

$56 \div 8 =$

Use a number line to do this.



Add 5 and 2 = 7.

$56 \div 8 = 7$



Year 3

Week 10 Day 2

Remember: Pencil, short date, underlined.

We do $78 \div 3$

Remember
Reasoning is
important -
challenge
yourselves!



Calculation at Chesswood

Division

2

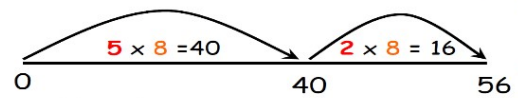
Number Line in chunks

What jumps of 8 can you make on the number line towards 56?
 $5 \times 8 = 40$ would be good!

Now a jump of $2 \times 8 = 16$ would take you to 56.

$56 \div 8 =$

Use a number line to do this.



Add 5 and 2 = 7.

$$56 \div 8 = 7$$

Year 3



Week 10 Day 2

Remember: Pencil, short date, underlined.

You do $87 \div 3$

Remember
Reasoning is
important -
challenge
yourselves!



Calculation at Chesswood

Division

2

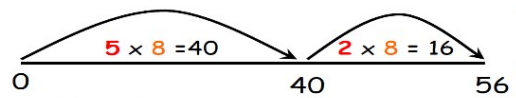
Number Line in chunks

What jumps of 8 can you make on the number line towards 56?
 $5 \times 8 = 40$ would be good!

Now a jump of $2 \times 8 = 16$ would take you to 56.

$56 \div 8 =$

Use a number line to do this.



Add 5 and 2 = 7.

$$56 \div 8 = 7$$

Year 3



Week 10 Day 3

Remember: Pencil, short date, underlined.

I do $84 \div 6$

Remember
Reasoning is
important -
challenge
yourselves!



Calculation at Chesswood

Division

2

Number Line in chunks

What jumps of 8 can you make on the number line towards 56?
 $5 \times 8 = 40$ would be good!

Now a jump of $2 \times 8 = 16$ would take you to 56.

$56 \div 8 =$

Use a number line to do this.



Add 5 and 2 = 7.

$$56 \div 8 = 7$$

Year 3



Week 10 Day 3

Remember: Pencil, short date, underlined.

We do $96 \div 6$

Remember
Reasoning is
important -
challenge
yourselves!



Calculation at Chesswood

Division

2

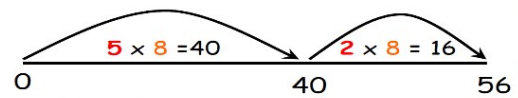
Number Line in chunks

What jumps of 8 can you make on the number line towards 56?
 $5 \times 8 = 40$ would be good!

Now a jump of $2 \times 8 = 16$ would take you to 56.

$56 \div 8 =$

Use a number line to do this.



Add 5 and 2 = 7.

$56 \div 8 = 7$



Year 3

Week 10 Day 3

Remember: Pencil, short date, underlined.

You do $102 \div 6$

Remember
Reasoning is
important -
challenge
yourselves!



Calculation at Chesswood

Division

2

Number Line in chunks

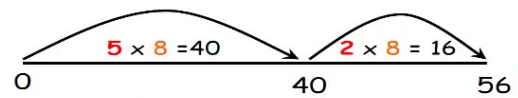
What jumps of 8 can you make on the number line towards 56?

$5 \times 8 = 40$ would be good!

Now a jump of $2 \times 8 = 16$ would take you to 56.

$56 \div 8 =$

Use a number line to do this.



Add 5 and 2 = 7.

$$56 \div 8 = 7$$

Year 3



Week 10 Day 4

Remember: Pencil, short date, underlined.

I do $114 \div 6$

Remember
Reasoning is
important -
challenge
yourselves!



Calculation at Chesswood

Division

2

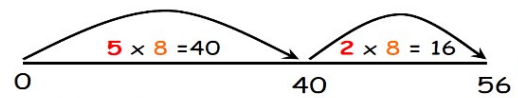
Number Line in chunks

What jumps of 8 can you make on the number line towards 56?
 $5 \times 8 = 40$ would be good!

Now a jump of $2 \times 8 = 16$ would take you to 56.

$56 \div 8 =$

Use a number line to do this.



Add 5 and 2 = 7.

$56 \div 8 = 7$



Year 3

Week 10 Day 4

Remember: Pencil, short date, underlined.

We do $132 \div 6$

Remember
Reasoning is
important -
challenge
yourselves!



Calculation at Chesswood

Division

2

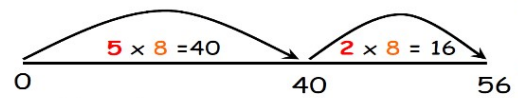
Number Line in chunks

What jumps of 8 can you make on the number line towards 56?
 $5 \times 8 = 40$ would be good!

Now a jump of $2 \times 8 = 16$ would take you to 56.

$56 \div 8 =$

Use a number line to do this.



Add 5 and 2 = 7.

$56 \div 8 = 7$



Year 3

Week 10 Day 4

Remember: Pencil, short date, underlined.

You do $150 \div 6$

Remember
Reasoning is
important -
challenge
yourselves!



Calculation at Chesswood

Division

2

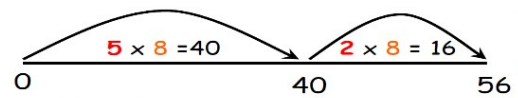
Number Line in chunks

What jumps of 8 can you make on the number line towards 56?
 $5 \times 8 = 40$ would be good!

Now a jump of $2 \times 8 = 16$ would take you to 56.

$56 \div 8 =$

Use a number line to do this.



Add 5 and 2 = 7.

$$56 \div 8 = 7$$

Year 3

