

Hundreds

1 How many balloons are there?

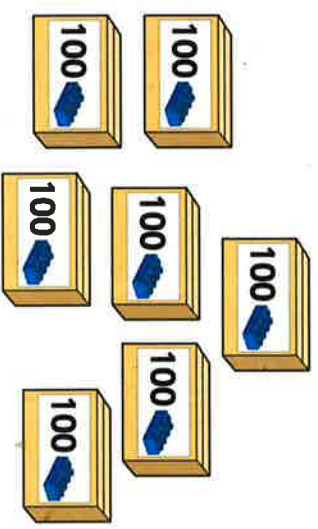


Write your answer in numerals and words.

There are balloons.

There are six hundred balloons.


2 How many bricks are there?




There are bricks.

There are seven hundred bricks.


3 Circle 800 pins.



4 What numbers are represented?



a) 200 $2 \times 100 = 200$



b) 500 $5 \times 100 = 500$