




300322

	WALT: I can identify tenths
	I can problem solve using tenths
	I can recognise a tenth
	I know how to find and make tenths
	With support, I can recognise a tenth
	With support, I know how to find and make tenths

Write the fraction next to the image:



$\frac{1}{10}$ ✓

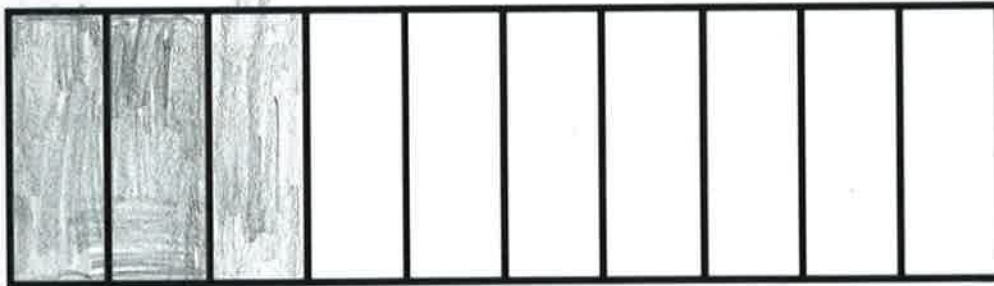


$\frac{5}{10}$ ✓




$\frac{3}{10}$ ✓

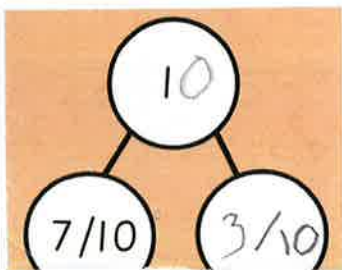
Colour in $\frac{3}{10}$ ✓



Colour in $\frac{6}{10}$ ✓



Complete the part/whole model ✓



Annie has travelled $\frac{7}{10}$ of the way across a balance beam.



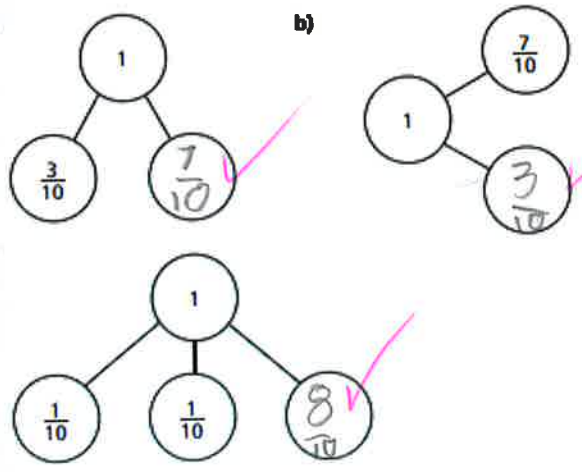
How many tenths does she have left to travel? $\frac{3}{10}$

Use an addition that shows Annie's total journey.

1. she will have to go $\frac{3}{10}$ so still she will get to the end.

complete the part-whole models.

b)



How did you find the missing parts?

1. I used my number bonds to 10.

How did you know you had to reach 10?