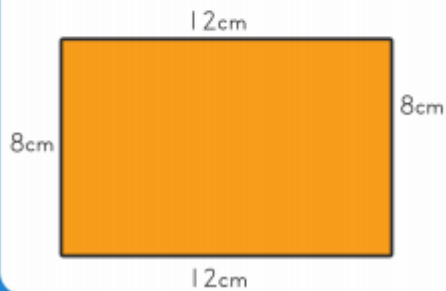
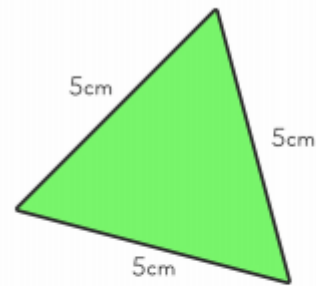


## Finding the Perimeter

The **perimeter** of this triangle is:

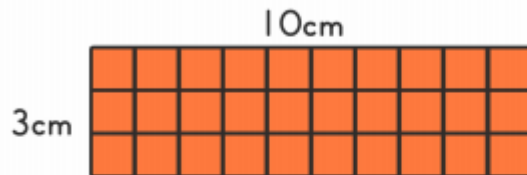
$$5\text{cm} + 5\text{cm} + 5\text{cm} = 15\text{cm}$$



The **perimeter** of this rectangle is:

$$12\text{cm} + 12\text{cm} + 8\text{cm} + 8\text{cm} = 40\text{cm}$$

## Finding the Area: Rectangle



The area:

$$10\text{cm} \times 3\text{cm} = 30\text{cm}^2$$

The area:  
 $7\text{cm} \times 6\text{cm} = 42\text{cm}^2$

