



Maths Reasoning

Explain

3 on each dice
4 dice
12 dots in total




4 on each dice
 dice
28 dots in total



How many dice are there?

Show and tell me how you found the answer.

Explain



3 rows

5 columns

15 dots in total

How many columns are there?

Show and tell me how you found the answer.



4 rows

columns

24 dots in total

Remember! Using drawings to show how you solved a question counts as reasoning.


Answers

Explain

3 on each dice

4 dice

12 dots in total



4 on each dice

dice

28 dots in total




28 divided by 4 = 7

4 x 7 = 28

7 x 4 = 28

Explain



3 rows

5 columns

15 dots in total



4 rows

columns

24 dots in total

24 divided by 4 = 6

6 x 4 = 24

4 x 6 = 24